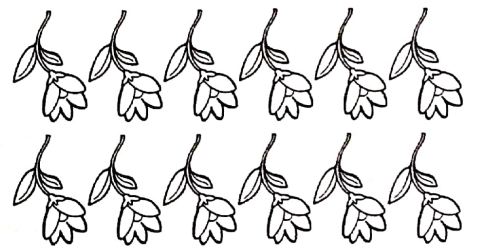


Je réviser




Exercice n° 1


Complète les égalités.



6 + =
2 + =
6 X = 2 X =



8 + =
3 + =
8 X = 3 X =



..... + =
..... + =
..... X =
..... X =

Exercice n° 2

Colore de la même couleur les additions et les multiplications qui leur correspondent.

3 + 3 + 3 + 3

4 X 5

3 X 4

9 + 9 + 9

5 X 7

4 + 4 + 4 + 4 + 4

7 + 7 + 7 + 7 + 7

3 X 9

Score :

Score :

.....
.....