


Geométrie GMI


Date _____
Prénom _____

1

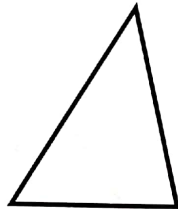
1. Ces figures sont-elles des polygones ?




Oui Non



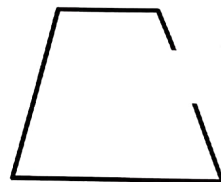
Oui Non



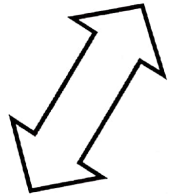
Oui Non



Oui Non



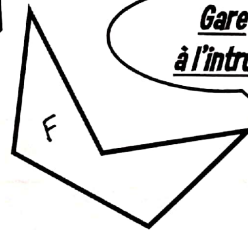
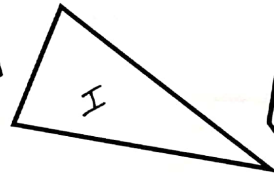
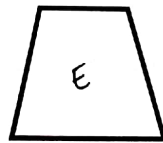
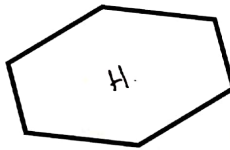
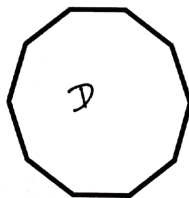

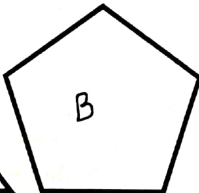
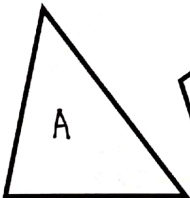
Oui Non



Oui Non

2. Colorie de la bonne couleur.

<u>triangle</u>	<u>quadrilatère</u>	<u>pentagone</u>	<u>hexagone</u>	<u>octogone</u>
BLEU	JAUNE	ROUGE	VERT	VIOLET



Gare à l'intrus!



3. Dans ton cahier, trace un pentagone.

<http://laclassibleue.fr/>

Geométrie / Les polygones