





La multiplication = les tableaux
rectangulaires.

① Écris les multiplications qui correspondent à chaque tableau rectangulaire et donne le résultat (le produit).



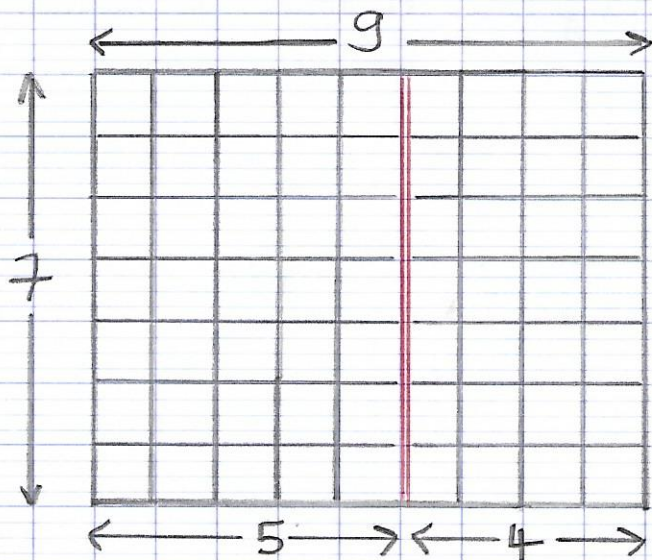
② Dessine les tableaux rectangulaires qui correspondent aux multiplications suivantes.

$$4 \times 6 = \bigcirc$$

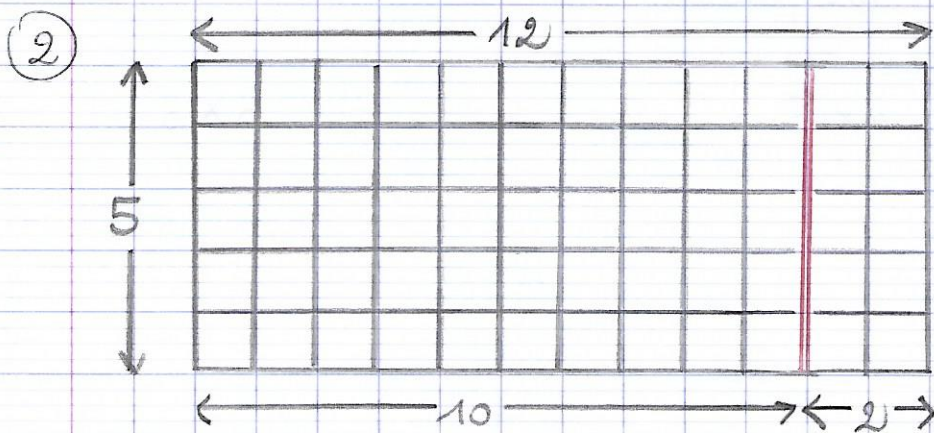
$$3 \times 8 = \bigcirc$$

La multiplication = la distributivité.

① Trouve le nombre de carreaux en t'aidant de ce que tu connais.



$$\begin{aligned} 9 \times 7 &= 7 \times 9 \\ &= 7 \times (5 + 4) \\ &= (7 \times 5) + (7 \times 4) \\ &= 35 + 28 \\ &= 63 \end{aligned}$$



$$\begin{aligned} 12 \times 5 &= 5 \times 12 \\ &= 5 \times (10 + 2) \\ &= (5 \times 10) + (5 \times 2) \\ &= 50 + 10 \\ &= 60 \end{aligned}$$