



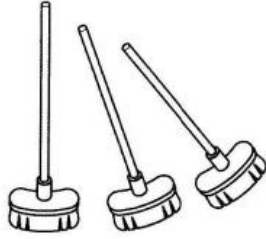



Exercices de Mesures de Longueur

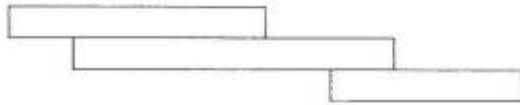
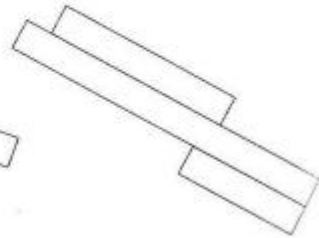
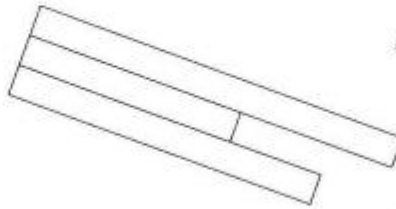
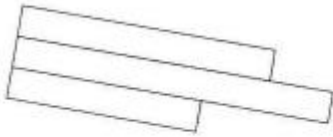

1) Quel est l'objet le plus long ?



2) Quel est l'objet le plus court ?



3) Pour chaque groupe de 3 bandes, colorie la plus courte en bleu et la plus longue en orange




4) Observe chaque photo et indique la mesure de chaque règle :



.....cm



.....cm



.....cm



.....cm