

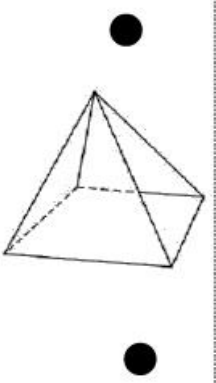
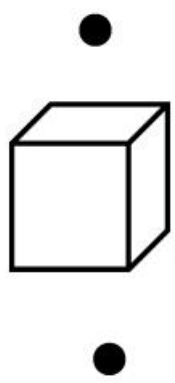
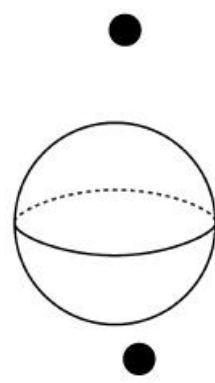




Géométrie

Les solides

1

Je relie chaque objet à son solide.



2

Je relie chaque solide à son nom.

cube

cylindre

cône

sphère

pyramide

paré

